


Forces are everywhere

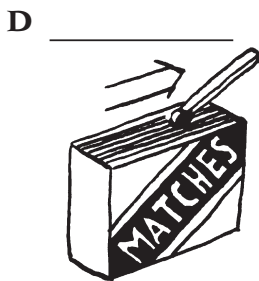
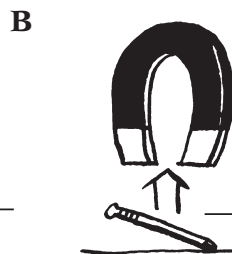
Name _____

Class _____

- 1 Which forces are pushes and which ones are pulls? Write the correct words in the spaces.



- 2 Look at the pictures below. Write the names of the forces next to the arrows.



- 3 Which pictures show non-contact forces? _____

- 4 Complete these sentences.

- a A _____ is needed to start an object moving.
- b A force can change the _____, _____ and _____ of an object.
- c Nothing starts to move without a _____ being involved.
- d Three forces which can act from a distance are _____, _____ and _____ forces.