

Name \_\_\_\_\_

Class \_\_\_\_\_



**I** Look at the four pictures below. The size of the arrow represents the size of the force and its direction.

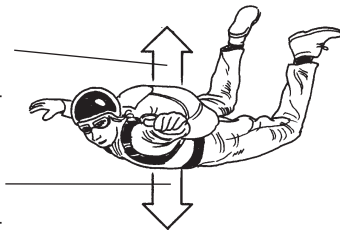
For each picture fill in the gaps.

**A** This force is called

\_\_\_\_\_

This force is called

\_\_\_\_\_



The forces

are \_\_\_\_\_

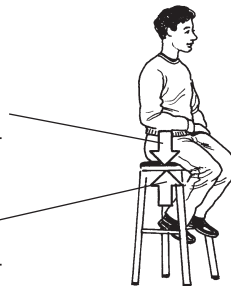
(balanced/unbalanced).

**B** This force is called

\_\_\_\_\_

This force is called

\_\_\_\_\_




The forces

are \_\_\_\_\_

(balanced/unbalanced).

**C**




The forces are \_\_\_\_\_

(balanced/unbalanced).

The car \_\_\_\_\_

(will/will not) move.

**D**



The forces are \_\_\_\_\_

(balanced/unbalanced).

The \_\_\_\_\_ (boy/girl)

will win the contest.